

NAV JEEWAN MODEL SCHOOL




SUMMER Vacation



HOLIDAY HOMEWORK

- 2026 -

CLASS
5th



Use your time wisely, stay curious, keep learning
and make every day of your vacation meaningful.

★ **Today's Effort, Tomorrow's Success!** ★

हिन्दी ग्रीष्मावकाश कार्य

☞ प्रिय बच्चो,

छुट्टियां आराम करने के साथ-साथ कुछ नया सीखने का भी समय होती है। नीचे दिए गए कार्य सुंदर लिखावट, रचनात्मकता और ज्ञान बढ़ाने के लिए बनाए गए हैं। सभी कार्य साफ-सुथरे और रंगीन तरीके से करो।

🌸 प्रतिदिन 1 पेज सुंदर लिखावट में सुलेख लिखिए। (assignment register)

🌸 पाठ-1 और पाठ-2 (हमारी हिन्दी) के प्रश्न-उत्तर याद करो और लिखो। (assignment register)

🌸 चित्र देखकर कहानी लिखिए (कार्यपत्रक (worksheet) पर करो और (assignment register) में चिपकाएं।

🌸 Project File Activity (गतिविधि कार्य) 🌸

विषय: "जल संरक्षण"

🌿 (project file) में सुंदर शीर्षक लिखिए- 'जल है तो कल है।

🌿 पानी बचाने के 5-7 तरीके लिखिए।

☞ विषय: "एक दिन बिना पानी"

🌿 इस विषय पर अपने विचार लिखिए।

🌸 दिये गए कार्यपत्रक (worksheets) को ध्यानपूर्वक हल करें और (assignment register) में चिपकाएं।

🌸 POSTER MAKING: ON A4 SIZE SHEET:

🌿 विषय: "बिजली बचाओ" पर बहुत सुंदर चित्र बनाएँ।

🌿 "वर्षा जल संरक्षण" क्या है और उसका उपयोग हम कहां कर सकते हैं, अपने विचार लिखिए (assignment register work)।



अनेक शब्दों के लिए एक शब्द

प्र०1 निम्नलिखित वाक्यांशों तथा शब्दों का उचित मिलान कीजिए :-

(क) सप्ताह में एक बार होने वाला	पठनीय
(ख) किए उपकार को मानने वाला	आस्तिक
(ग) विज्ञान से संबंध रखने वाला	ग्रामीण
(घ) काम करने वाला	दर्शनीय
(ङ) जो देखने योग्य हो	वैज्ञानिक
(च) जो ईश्वर में विश्वास रखता हो	साप्ताहिक
(छ) गाँव में रहने वाला	दैनिक
(ज) जो पढ़ने योग्य हो	कृतज्ञ
(झ) दिन में एक बार होने वाला	कर्मठ

प्र०2 निम्नलिखित शब्दों के उचित वाक्यांश लिखिए :-

(क) गायिका	_____
(ख) वार्षिक	_____
(ग) नास्तिक	_____
(घ) शहरी	_____
(ङ) कृतघ्न	_____
(च) मासिक	_____

हिंदी कार्य अभ्यास

नाम:

दिनांक :

संज्ञा

क शब्दों में से व्यक्ति, वस्तु, स्थान, प्राणी और भाव संज्ञा शब्दों को छाँटकर लिखिए।

दादाजी किताब हरियाली लड़की मोना दिल्ली गुड़िया घर
सचिन तेंदुलकर चिड़िया राघव बस्ता सड़क मिठास शेर गुब्बारा
पार्क कुरता चूहा खुशी स्कूल डर तितली मोर दर्द

व्यक्ति	वस्तु	स्थान	प्राणी	भाव

ख शब्दों में से व्यक्ति, वस्तु, स्थान, प्राणी और भाव संज्ञा शब्दों को छाँटकर लिखिए।

गायक वीरता जंगल जीत हथिनी सुरीला कलम
जापान मॉल कश्मीर छात्रा कुत्ता पाठशाला बिल्ला
दूध बंदर बुढ़ापा नानी बच्चों गिलास हलवाई
जलेबियाँ साँप हार मोबाइल

व्यक्ति	वस्तु	स्थान	प्राणी	भाव

NAV JEEWAN MODEL SCHOOL

दिए गए शब्दों के विलोम शब्द लिखे।

• बड़ा → _____

• सच्चा → _____

• गरम → _____

• दिन → _____

• भारी → _____

• साफ → _____

• ऊँचा → _____

• तेज → _____

• खुश → _____

• मीठा → _____

• भरा → _____

• रोना → _____

• सस्ता → _____

• कमजोर → _____

• लंबा → _____

• सुंदर → _____

• खट्टा → _____

• ज्यादा → _____

• शांत → _____

• मोटा → _____

• जल्दी → _____

• खुशबू → _____

• सदी → _____

• ऊपर → _____

• खुला → _____

• कठिन → _____

• गहरा → _____

• सफेद → _____

• पास → _____

• जिंदा → _____

चित्र लेखन

चित्र के अनुसार कहानी का शीर्षक और कहानी लिखे:




.....
.....

.....
.....
.....
.....
.....
.....
.....
.....
.....
.....


ENGLISH

READER

 Do Revision of lesson-1 The Recycling Rap and lesson-2 The Wedding in Russia in assignment register

 Read Lesson-3 True Friends and Lesson 5- The king of the Golden River also write the summary of the chapter in assignment register.


GRAMMAR

 Do Revision of lessons-1,2,3,4 in assignment Register.

 Do Revision of Paragraph - Saving Mother Earth in assignment Register.


FUN ACTIVITIES


 Read and Write the Comprehension in assignment notebook carefully.

 Write the poem on SDG 14 LIFE BELOW WATER neatly on an A-4 size sheet, draw and color the pictures beautifully, decorate the page creatively, and paste it in your assignment notebook.

Or

Create an engaging 2-3 minutes interactive video. Choose any one meaningful topic as Saving water, keeping the environment clean, or helping others. And have a short conversation with your parents or elders. Also, share what you learned at the end.

 Visit the school library and choose any storybook of your choice. Read the story carefully and write a short summary in about 100 words. Also, draw your favorite character from the story and write the moral value you learned from it.

 Take the print out of Worksheet complete it and paste in your assignment register.

My best friend

Hello! My name is Sara and I'm thirteen years old. I'm from Madrid, Spain. My best friend is Martyna, who is Polish and is thirteen, too. She came to Spain with her family four years ago. At the beginning she didn't speak Spanish very well but now it's different. She's very hard-working at school and she's fluent in Spanish now.

Martyna is tall and pretty. She's got long curly brown hair and brown eyes. She goes to my school and she lives not far from my house. We often come back from school together. After school we also spend some time together. I sometimes go to her house or she comes to mine and we listen to music and talk about different things: books, video games and films. She likes reading a lot. Last year she won a special prize for the best reader in our class. She's also good at other languages that we learn: English and German.




My friend is not very sporty. She doesn't like team games, but she likes swimming. I like sports and we go swimming together on Saturday mornings. She's a bit shy with new people but with me she's friendly and generous. I also admire her for adapting so easily to the new environment.


1 Read the text and answer the questions.

1. How old are Sara and Martyna? _____
2. When did Martyna come to Spain? _____
3. Does she speak Spanish very well? _____
4. What does she do after school? _____
5. What prize did Martyna win last year? _____
6. When do Sara and Martyna go swimming? _____
7. What languages does she study? _____

2 Read the text and decide if the sentences are true (T) or false (F).



1. Martyna is from Poland.
2. She has been in Spain for three years now.
3. She's got long curly blond hair.
4. She's very fond of reading books.
5. She won a prize for the best sport achievement.
6. She goes jogging on Saturday mornings.
7. Sara admires Martyna.



WORKSHEET

Find the correct possessive noun in the Bingo Box.

Riya's	boys'	cat's	children's	teacher's
dog's	girls'	Rahul's	birds'	mother's
player's	baby's	students'	doctor's	rabbit's
uncle's	friends'	lion's	brother's	class's

1. The bag belongs to Riya. → _____
bag
2. The tail belongs to the cat. → _____
tail
3. The books belong to the boys. →
_____ books
4. The toys belong to the children. →
_____ toys
5. The car belongs to my mother. →
_____ car
6. The classroom belongs to the teacher.
→ _____ classroom

Worksheet

Find the correct answer
in the Bingo Box.

king	actress	nephew	mare	lioness
bride	rooster	aunt	wizard	peahen
hostess	fox	gentleman	heroine	tigress
uncle	princess	bull	nun	husband
empress	waiter	drake	goddess	son

1. What is the feminine gender of **lion**?
2. What is the masculine gender of **aunt**?
3. What is the feminine gender of **hero**?
4. What is the masculine gender of **mare**?
5. What is the feminine gender of **prince**?
6. What is the masculine gender of **nun**?
7. What is the feminine gender of **god**?
8. What is the masculine gender of **peahen**?
9. What is the feminine gender of **fox**?
10. What is the masculine gender of **bride**?

CRAZY Stories!

COOKING FOR A FRIEND!

Fill in the blanks with the right parts of speech to complete this outrageous story!

One day _____ and _____ wanted to cook _____ for
(NAME 1) (NAME 2) (FOOD)

_____. They wanted to make the meal very _____
(NAME 3) (ADJECTIVE)

so they went to the _____ store. When they got there they
(NOUN)

saw a shelf full of _____ and _____.
(ADJECTIVE) (PLURAL NOUN) (ADJECTIVE) (PLURAL NOUN)

"This _____ would go _____ with the _____"
(ADJECTIVE) (NOUN) (ADVERB) (ADJECTIVE)

_____" _____ explained _____. Once back in
(PLURAL NOUN) (NAME 1) (ADVERB)

the kitchen, _____ pulled out a _____ and began
(NAME 2) (ADJECTIVE) (NOUN)

_____ the _____. "Preparing _____ always makes my
(-ING VERB) (PLURAL NOUN) (PLURAL NOUN)

_____," _____ said. Finally, the _____ was done
(PLURAL NOUN) (VERB) (NAME 1) (NOUN)

_____ in the oven and _____ came home from _____.
(-ING VERB) (NAME 3) (LOCATION)

"_____! something smells _____ in here," said _____.
(EXCLAMATION) (ADJECTIVE) (NAME 3)

Everyone _____ and started _____ the _____.
(PAST TENSE VERB) (-ING VERB) (NOUN)

complete with sides of _____, _____, and _____!
(ADJECTIVE) (PLURAL NOUN) (PLURAL NOUN)

Word Bank

- NOUN
- PRONOUN/NAME
- ADJECTIVE
- VERB
- ADVERB
- EXCLAMATION
- LOCATION

♥ Cook with love, serve with a smile!

Parts of Speech Crossword Puzzle

Test your grammar knowledge and solve the puzzle!



ACROSS

3. A past tense state of being verb.
6. A word or phrase that expresses strong emotion.
8. An adverb.
11. An adjective describing a chihuahua.
13. What kind of word describes verbs, adjectives and adverbs?
16. A word used to connect 2 words, phrases or clauses.
17. What kind of word takes the place of a noun?
18. One of the 3 articles
19. A preposition.

DOWN

1. A noun. Antonym of ugly.
2. An interjection.
4. The 3 adjectives that refer to one specific thing is an _____.
5. A word that shows action or state of being.
7. A person, place, thing, or idea.
9. A word that describes a noun or pronoun.
10. A connecting word that shows location, time, or movement.
12. A plural pronoun.
14. A conjunction.
15. An action verb.

WORD BANK HINTS

Think of the parts of speech you know and love!



Mathematics

👉 Read the instructions carefully:

✦ Complete all the work in neat and clean handwriting.

✦ Do all the work only in the notebook/file provided.

✦ Solve all the worksheets carefully.

✦ Complete all the activities creatively.

🌸 Learn tables up to 20 and write them in your activity notebook.

🌸 Complete the exercise on page number 20 of Chapter 1 (Numbers and Number System) in your activity notebook.

🌸 Complete the exercise on page number 39 of Chapter 2 (Addition and Subtraction) in your activity notebook.

🌸 Solve practice worksheets given and paste it in your (assignment register).

👉 DO THIS ACTIVITIES CREATIVELY.

🌸 Make a different type of shapes with the help of matchsticks and paste it on scrap file.

🌸 Calendar Activity:

Children observe your birthday month in Calendar and give answers:

Q1. How many Sundays?

Q2. Total days?

Q3. Which dates are even numbers?

Q4. Which dates are odd numbers?

4 and 5 Digit Mixed Addition and Subtraction

Name: _____

Score: _____ /20

Time: _____

1. $\begin{array}{r} 4655 \\ + 61244 \\ \hline \end{array}$	2. $\begin{array}{r} 71448 \\ - 17138 \\ \hline \end{array}$	3. $\begin{array}{r} 53343 \\ + 8591 \\ \hline \end{array}$	4. $\begin{array}{r} 9453 \\ - 6906 \\ \hline \end{array}$
5. $\begin{array}{r} 84160 \\ - 53416 \\ \hline \end{array}$	6. $\begin{array}{r} 97622 \\ + 63535 \\ \hline \end{array}$	7. $\begin{array}{r} 44924 \\ - 32120 \\ \hline \end{array}$	8. $\begin{array}{r} 2745 \\ + 9840 \\ \hline \end{array}$
9. $\begin{array}{r} 78369 \\ - 35184 \\ \hline \end{array}$	10. $\begin{array}{r} 20523 \\ + 3685 \\ \hline \end{array}$	11. $\begin{array}{r} 7866 \\ + 11455 \\ \hline \end{array}$	12. $\begin{array}{r} 80456 \\ - 43684 \\ \hline \end{array}$
13. $\begin{array}{r} 11549 \\ - 2316 \\ \hline \end{array}$	14. $\begin{array}{r} 53778 \\ + 2780 \\ \hline \end{array}$	15. $\begin{array}{r} 73387 \\ - 30273 \\ \hline \end{array}$	16. $\begin{array}{r} 76202 \\ + 21514 \\ \hline \end{array}$
17. $\begin{array}{r} 92750 \\ - 79971 \\ \hline \end{array}$	18. $\begin{array}{r} 4149 \\ + 5896 \\ \hline \end{array}$	19. $\begin{array}{r} 52159 \\ - 41846 \\ \hline \end{array}$	20. $\begin{array}{r} 36991 \\ + 5700 \\ \hline \end{array}$

Complete the following questions.

1. How many sides does a square have? _____

2. How many sides does a triangle have? _____

3. How many corners does a square have? _____

4. How many corners does a circle have? _____

5. How many straight lines does a semi-circle have?

6. Are all the sides of a rectangle the same size? _____

7. Are all the sides of a square the same size? _____

8. A rectangle has _____ sides.

9. A triangle has _____ sides.

10. An oval has _____ sides.

WORKSHEET 5

Word Problems

Read each problem carefully and write your answer in the box.

1

A shopkeeper sold goods worth ₹45,678 on Monday and ₹23,456 on Tuesday. How much did he earn in total?



Answer:

2

A school has 9,50,000 books. If 2,35,000 books are issued, how many are left?



Answer:

3

Riya had ₹50,000. She spent ₹12,345 on a bicycle. How much money is left?



Answer:

4

A factory produced 4,20,000 toys in one year and 3,80,000 toys next year. Find the total production.



Answer:

5

A number is 78,901. If we subtract 23,456, what is the result?



Answer:

6

A library had 1,20,000 books. It bought 35,000 more. How many books are there now?



Answer:



Think smart, solve it with a heart!



SCIENCE

- 🌸 Do Revision of Chapter -1 The Circulatory System in your assignment register.
- 🌸 Read Chapter-3 Food and Health and Chapter-4 Flowers and Pollination.
- 🌸 Take a print out of Worksheet, complete with and paste in your assignment Register.
- 🌸 **Global Art 2030 – Creativity for Change**

Global Art 2030 is an international initiative that encourages young minds to express their ideas, concerns, and hopes for the future through art. It connects creativity with global issues like climate change, peace, sustainability.

- i. What is the purpose of Global Art 2030 and how does it connect art with global issues?
- ii. How can art be used as a powerful tool to spread awareness about environmental and social problems?
- iii. What themes related to the future of the Earth can be expressed through art?
- iv. In what ways can art influence people’s thinking and behaviour towards the environment?
- v. How can participation in global initiatives like Global Art 2-030 benefit students?

🌟 **FUN ACTIVITIES**

🍷 Make a poster on SDG 2 ZERO HUNGER and Write a slogan about it. A-4 size sheet.

🍷 Create a mini "Health Summer Recipe Book"

Include

- Prepare 3 Healthy Recipes at Home.
- Write their Ingredients names.
- Benefits of the Recipes.
- Take a picture of all 3 Healthy food and paste in your recipe Book.

🍷 Do One day Survey near to your home, aware the public and ask them to fill the Questionnaire then paste in your assignment Register.

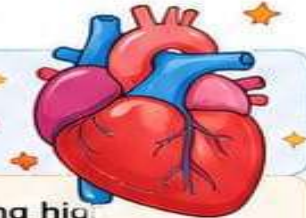


The Amazing Circulatory System



Instructions: Read the passage carefully and answer the questions that follow.

The Circulatory System: Your Body's Highway



The circulatory system is like your body's amazing highway network. It's responsible for moving blood throughout your body. This system includes your heart, blood vessels, and **blood**. Your heart is a powerful muscle, about the size of your fist, located slightly to the left of the center of your chest. It works non-stop, pumping blood to every part of your body. Think of it as the main engine of the highway! Blood vessels are the roads and tunnels of this highway. There are three main types: **arteries**, **veins**, and **capillaries**. Arteries carry oxygen-rich blood away from your heart to your body. Veins carry oxygen-poor blood and waste products back to your heart. Capillaries are tiny, tiny vessels where oxygen and nutrients are exchanged with your body cells, and waste products like carbon dioxide are picked up. Finally, blood is the traffic on this highway. It's a vital fluid made of red blood cells (which carry oxygen), white blood cells (which fight germs), platelets (which help stop bleeding), and plasma (the liquid part). Together, these parts ensure that oxygen and nutrients reach all your cells and waste is removed, keeping you healthy and energetic!

— Comprehension Questions —



1 What is the main job of the circulatory system?



2 Name the three main parts of the circulatory system.



3 What are the three types of blood vessels?

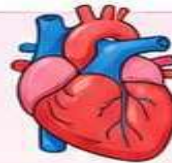


The Circulatory System

Let's learn and fill in the blanks!

1. Choose the correct answer.

1 What is the **main organ** of the circulatory system?
It's the _____.



2 What does the **circulatory system** do?
It brings _____
to all parts of the body.



3 What can you do to **take care** of your heart?
We can _____ and _____.



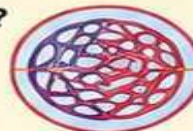
4 How big is your heart?
It's as big as your _____.



5 What kind of **blood vessels** bring blood from the heart to the organs?
The _____
bring blood from the heart to the organs.



6 Where are **oxygen and nutrients** exchanged?
They are exchanged in small vessels called _____.



7 What type of **blood vessels** bring blood from the organs to the heart?
The _____
bring blood from the organs to the heart.



8 The rhythmic movement of blood in the arteries is called _____.



9 Eating healthy food and doing yoga is good for your heart _____.



10 The upper two chambers are called _____
and lower two chambers are called _____.



FOOD Pyramid Match-Up

In each row, check the correct color to match the foods to their place in the food pyramid.



Grains Vegetables Fruits Oils Dairy Meat and Beans



	<input type="checkbox"/>		<input type="checkbox"/>		<input type="checkbox"/>
--	--------------------------	--	--------------------------	--	--------------------------



	<input type="checkbox"/>		<input type="checkbox"/>		<input type="checkbox"/>
---	--------------------------	---	--------------------------	---	--------------------------



	<input type="checkbox"/>		<input type="checkbox"/>		<input type="checkbox"/>
---	--------------------------	---	--------------------------	---	--------------------------



	<input type="checkbox"/>		<input type="checkbox"/>		<input type="checkbox"/>
---	--------------------------	---	--------------------------	---	--------------------------



	<input type="checkbox"/>		<input type="checkbox"/>		<input type="checkbox"/>
---	--------------------------	---	--------------------------	---	--------------------------



	<input type="checkbox"/>		<input type="checkbox"/>		<input type="checkbox"/>
---	--------------------------	---	--------------------------	---	--------------------------

WORKSHEET

SDG Goal 2 – Zero Hunger Questionnaire

1. What is the main aim of SDG Goal 2?
 - A) Clean water
 - B) Zero Hunger
 - C) Quality education
 - D) Clean energy
2. What should we do with leftover food?
 - A) Throw it away
 - B) Waste it
 - C) Reuse or share it
 - D) Ignore it
3. Which habit helps reduce hunger?
 - A) Wasting food
 - B) Sharing food
 - C) Throwing food
 - D) Skipping meals
4. How can students help achieve Zero Hunger?
 - A) Waste food
 - B) Eat junk food daily
 - C) Respect food and avoid waste
 - D) Throw extra food away
5. What should you do before taking food on your plate?
 - A) Take extra food
 - B) Take only what you can eat
 - C) Waste food
 - D) Ignore leftovers

WORKSHEET

6. Which action helps reduce food wastage?

- A) Throwing leftover food in the dustbin
- B) Buying too much food
- C) Storing food properly
- D) Leaving food uncovered

7. What can you do with extra food at home?

- A) Waste it
- B) Hide it
- C) Share it with others
- D) Step on it

8. What should you do if food falls accidentally but is still clean and safe?

- A) Waste it immediately
- B) Play with it
- C) Respect food and avoid wasting it
- D) Throw all food away

9. What does "Zero Hunger" dream of?


- A) Everyone having toys
- B) Everyone getting healthy food to eat
- C) Everyone eating candy daily
- D) Everyone wasting food

10. Which slogan best supports Zero Hunger?

- A) "Waste More Food"
- B) "Skip Healthy Meals"
- C) "Every Grain Counts"
- D) "Throw Food Away"

SOCIAL STUDIES

- 1) Learn and write lesson-1,10 in assignment register.
- 2) write in 100 to 120 words. "How I helped the environment during my summer vacation" (Assignment Register).
- 3) Survey Activity- Ask 5 Neighbors: How do you save water or electricity at home. Make table: Name- Method used (project file).
- 4) Map work
Draw or paste Indian map and mark: Rivers, states and capital, Archaeological sites, forests. Paste maps in project file.
- 5) Do given worksheets and paste in Assignment register.
- 6) Make a beautiful chart on Fundamental Rights and Duties on A4 size sheet.





WORKSHEET: LOCATING PLACES ON THE EARTH



SECTION 1: FILL IN THE BLANKS

- The _____ is an imaginary line that divides the Earth into the Northern and Southern Hemispheres.
- Lines of _____ run parallel to the Equator.
- The Prime Meridian is marked as _____ degrees longitude.
- The _____ Circle is located at 66.5° North latitude.
- _____ and _____ help us find the exact location of a place on Earth.



REMEMBER!

The Earth can be located using latitude and longitude.

SECTION 2: MATCH THE FOLLOWING

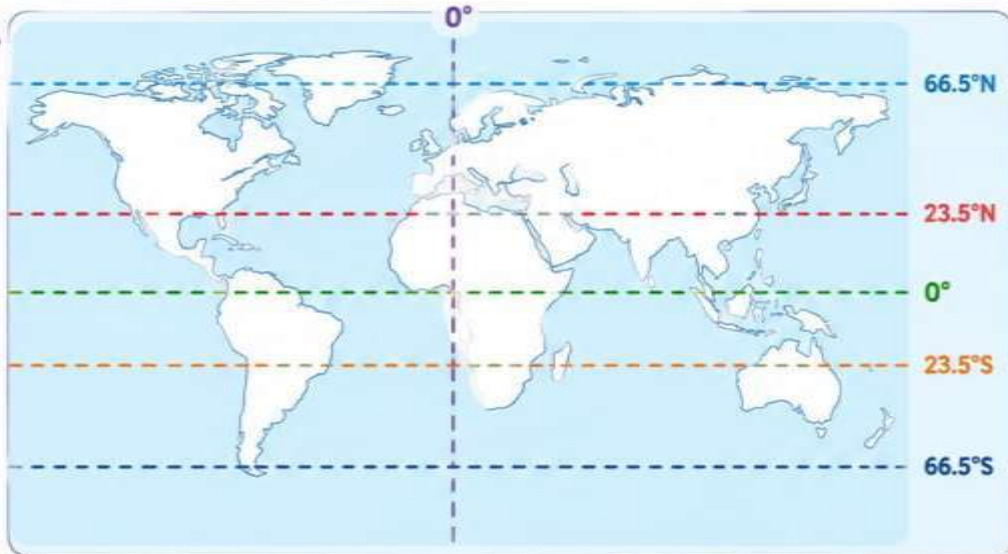
- | | | |
|------------------------|-----|-----------------|
| A. Equator | • • | 1. 0° Longitude |
| B. Prime Meridian | • • | 2. 0° Latitude |
| C. Tropic of Cancer | • • | 3. 23.5° South |
| D. Tropic of Capricorn | • • | 4. 23.5° North |
| E. Arctic Circle | • • | 5. 66.5° North |



SECTION 3: MAP ACTIVITY

On the world map provided, do the following:

- ★ Label the Equator, Tropic of Cancer, Tropic of Capricorn, Arctic Circle, and Prime Meridian.
- ★ Mark the location of India with a star.
- ★ Shade the Northern and Southern Hemispheres in different colors.



SECTION 4: COORDINATES PRACTICE

Write the approximate coordinates (latitude and longitude) of the following cities:



1. New Delhi



(_____ , _____)

2. Chennai



(_____ , _____)

3. Mumbai



(_____ , _____)



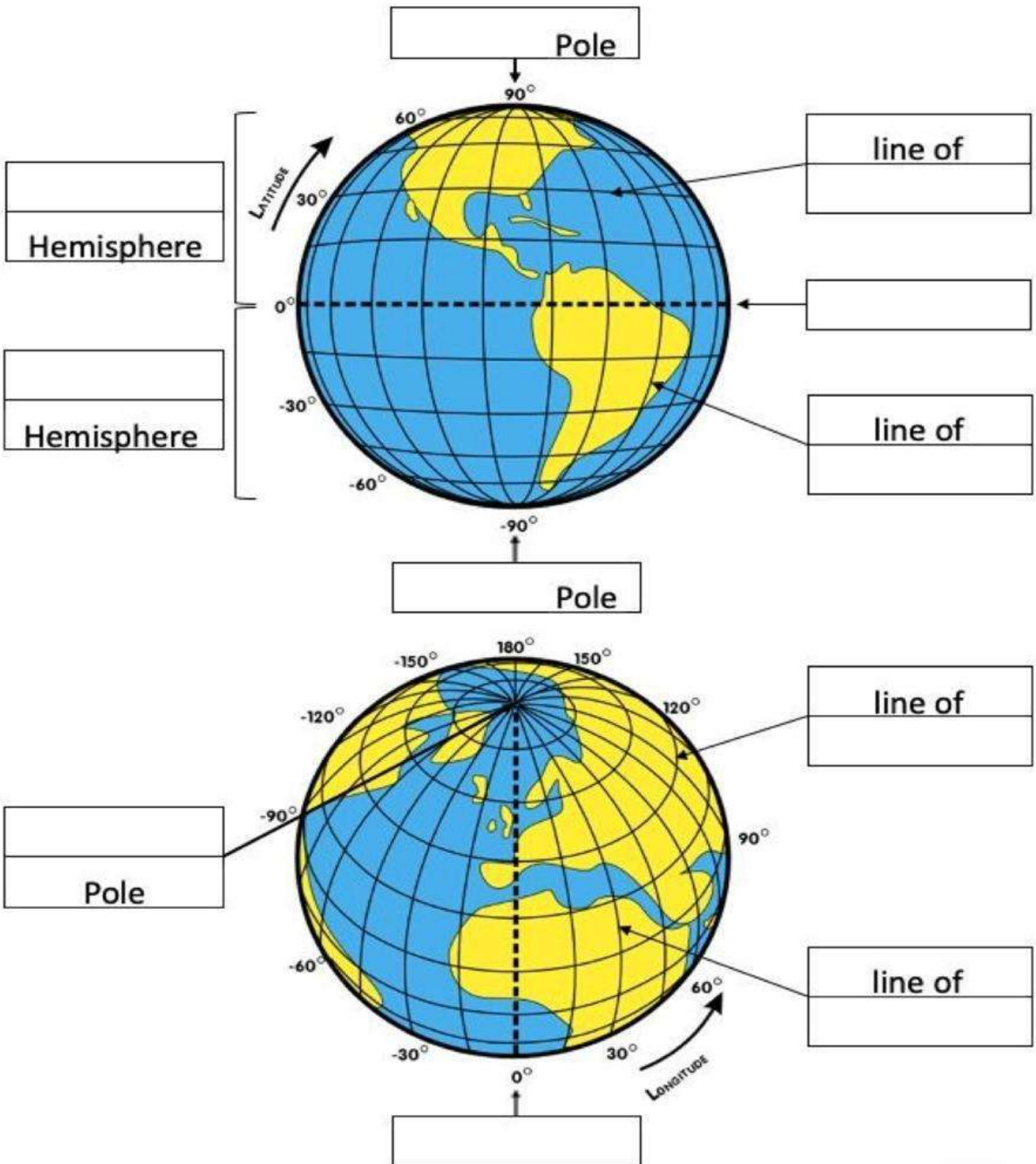
Explore the world. Know your Earth. Find every place with coordinates!



NAV JEEWAN MODEL SCHOOL

Date: _____

LI: To identify lines of latitude and longitude.



North Pole

line of latitude

Equator

Northern Hemisphere

South Pole

line of longitude

Prime Meridian

Southern Hemisphere



SOCIAL VALUES

Good Values, Better World!



What are Social Values?

Social values are good habits and qualities that help us live happily with others.

Examples: honesty, kindness, respect, sharing, helping others, and responsibility.



SECTION A - FILL IN THE BLANKS

Choose the correct word from the box:

honesty respect kindness sharing responsibility

- Saying the truth shows _____.
- Helping a friend in need shows _____.
- Taking care of your school bag is a sign of _____.
- We should show _____ to our parents and teachers.
- Giving your toys to others is called _____.



SECTION B - MULTIPLE CHOICE QUESTIONS

Tick (✓) the correct answer.

- Which value teaches us to speak politely?
a) Anger b) Respect c) Laziness
- What should you do if your friend falls down?
a) Laugh at them b) Ignore them c) Help them
- Returning lost money to the teacher shows:
a) Honesty b) Jealousy c) Carelessness
- Which one is a good social habit?
a) Fighting b) Sharing c) Shouting
- We should keep our classroom:
a) Dirty b) Untidy c) Clean

SECTION C - MATCH THE FOLLOWING

Column A

- Respect
- Honesty
- Kindness
- Responsibility

Column B

- Speaking the truth
- Helping others
- Obeying elders
- Taking care of things



Good values make a great person!

SECTION D - SHORT ANSWER QUESTIONS

- Why is sharing important?

- How can you show kindness in school?

- Write two good social values you follow every day.
♥ _____
♥ _____

SECTION E - VALUE-BASED QUESTIONS

- Riya saw a new student sitting alone during lunch break. What should she do?



- Aman accidentally broke his friend's pencil box. What is the right thing to do?



Remember:

Small acts of kindness make a big difference!



Be Kind



Be Respectful



Be Helpful



Be Responsible



Be Honest



G.k

- 1) write 5 current Affairs from newspaper daily (20 days) (Assignment Register).
- 2) collect different types of leaves and paste it in project file and write their uses also.
- 3) collect and paste pictures of biodegradable and non - biodegradable in project file.
- 4) Make a chart of writers of books on A4 size sheet with bold letters.

ANIMAL ADAPTATION

Choose the correct answer.

NAME : _____

TOPIC: ANIMAL ADAPTATION

a Identify the animal that sleeps throughout summer.

i Snail ii Deer iii Rabbit iv Frog



b Pick the parasite that lives on the host's body.

i Cockroach ii Lice iii Tapeworm iv Roundworm



c _____ can live on both land & water.

i Fish ii Frog iii Snail iv Octopus



d Sheep and Camel are _____ animals.

i omnivores ii wild iii herbivores iv aerial



e Birds are the example of _____ animals.

i domestic ii amphibians iii aerial iv aquatic



f Long winter sleep of animals is known as _____

i moulting ii aestivation iii hooves iv hibernation




g Whales and turtles have _____ that help in swimming.

i moulting ii wings iii flippers iv fins



h Animals that eat both plants and flesh of other animals are _____

i domestic ii pray iii omnivores iv carnivores



i Animal that can change its colour to protect itself.

i human being ii whale iii deer iv chameleon



j An example of endangered animal is _____

i human ii dodo iii cheetah iv seals



k To protect themselves from cold animals have _____

i thin skin ii wool iii thick, hairy skin iv fat



LEARN • THINK • CARE
Animals adapt... to survive!

NAV JEEWAN MODEL SCHOOL

Instruction: Write the correct answer in the blank.

- The longest river in India is _____.
- The first Prime Minister of India was _____.
- The planet closest to the Sun is _____.
- The national emblem of India has _____ lions.
- The hardest natural substance is _____.
- The largest ocean on Earth is the _____.
- The capital city of India is _____.
- The festival celebrated with colours is _____.
- The process of water turning into vapour is called _____.
- The part of a plant that makes food is the _____.

Instruction: Mark the correct option (A), (B), (C), or (D).

- Which animal lives both on land and in water?
(A) Camel (B) Frog (C) Tiger (D) Buffalo
- Which festival is celebrated on December 25th?
(A) Diwali (B) Christmas (C) Pongal (D) Raksha Bandhan
- Which part of the plant is under the ground?
(A) Leaf (B) Root (C) Flower (D) Stem
- What is the shape of a ball?
(A) Square (B) Circle (C) Oval (D) Sphere
- Which planet is known as the Blue Planet?
(A) Venus (B) Earth (C) Jupiter (D) Saturn
- Which one is a renewable energy source?
(A) Coal (B) Petrol (C) Solar energy (D) Plastic

COMPUTER (AI PROJECT)

Part A - Theoretical Learning Answer the following:

1. What is a computer virus?
2. What is antivirus?
3. Name any 3 computer diseases.
4. Write 4 symptoms of virus infection.
5. Write 4 ways to protect a computer from viruses.

Part B - Activity Activity 1

Switch on the System/Phone at your home and write:

- Name of antivirus software used
- Steps to scan a computer Write 4 lines about it.

Part C - Theoretical Learning Fill in the blanks:

1. protects a computer from viruses.
2. Virus can spread through
3. We should update our regularly.
4. Unknown email should not be opened.

Part D - Activity Poster Making

Make a small poster on:

Healthy Computer, Happy Computer

Write 4 points and decorate it neatly.

Create a Simple Circuit using Breadboard

A breadboard is a plastic board with tiny holes used to build circuits without soldering.

The top and bottom lines (rails) carry + and - power.

The middle holes (rows of 5) are connected inside, so parts placed in the same row are linked.

The gap in the middle is for chips (ICs).

NAV JEEWAN MODEL SCHOOL

Let us create a simple circuit using a breadboard.

Step 1: Connect the positive (+) end of battery to the positive (+) line of the breadboard.

Step 2: Connect the negative (-) end of battery to the negative (-) line of the breadboard.

Step 3: Place the LED on any two middle holes.

Step 4: Place the resistor on the breadboard so that its one end connects with the Negative (short) leg of the LED and its other end connects with any hole in the Negative line of the breadboard.

Step 5: With wire, connect the positive (short) leg of LED with any hole in the positive line of the breadboard.

Drawing

- 1) Poster Making - Make a colourful poster on -“Save Earth, Save Future”
- 2) Do pg. no-4 and 5 in your book.
- 3) Draw and colour “A sustainable city.
- 4) Prepare any 3 items with leaf beautiful fan, plate, spoon, small basket and bowl.

